



INDIAN SCHOOL AL WADI AL KABIR
DEPARTMENT OF MATHEMATICS (2021 – 2022)

TOPIC: NUMBER CONCEPTS (Recapitulation 1 to 100)

WORKSHEET NO -1

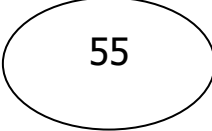
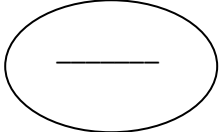
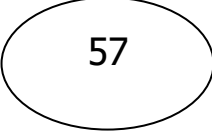
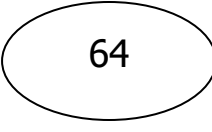
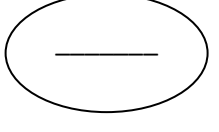
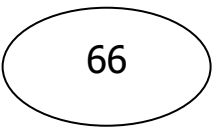
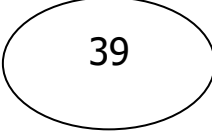
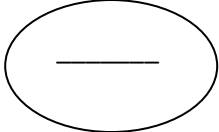
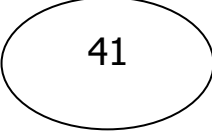
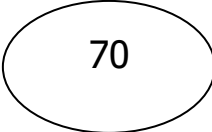
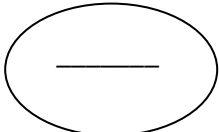
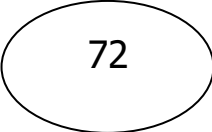
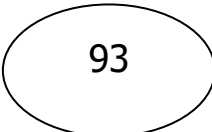
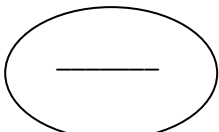
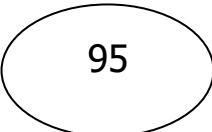
RESOURCE PERSON: Mrs. Sakina Patla

NAME: _____ CLASS: II SEC: ___ DATE: _____

Q1. Write the numbers that comes before and after the given numbers.

| | Before | | After |
|-----------|---------------|----|--------------|
| a. | | 10 | |
| b. | | 25 | |
| c. | | 73 | |
| d. | | 31 | |
| e. | | 98 | |
| f. | | 80 | |
| g. | | 49 | |
| h. | | 91 | |

Q3. Write the number that comes between the given numerals.

- a.**   
- b.**   
- c.**   
- d.**   
- e.**   



INDIAN SCHOOL AL WADI AL KABIR
DEPARTMENT OF MATHEMATICS (2021 – 2022)

TOPIC: NUMBER CONCEPTS (101 to 200) WORKSHEET NO -2

RESOURCE PERSON: Mrs. Sakina Patla

NAME: _____ CLASS: II SEC: _____ DATE: _____

Q1. Write the number names for the following.

a. 153 - _____

b. 166 - _____

c. 170 - _____

d. 200 - _____

e. 101 - _____

Q2. Write the numeral for the given number name.

a) *One hundred eleven* - _____

b) *One hundred thirty eight* - _____

c) *One hundred ninety five* - _____

d) *One hundred eight* - _____

e) *One hundred fifty* - _____

Q3. What comes

A) before

a) _____ **121**

b) _____ **199**

c) _____ **180**

B) after

a) **119** _____

b) **135** _____

c) **191** _____

C) between

a) **104** _____ **106**

b) **169** _____ **171**

c) **115** _____ **117**

d) **191** _____ **193**



INDIAN SCHOOL AL WADI AL KABIR

DEPARTMENT OF MATHEMATICS (2021 – 2022)

TOPIC: NUMBER CONCEPTS (101 - 200)

WORKSHEET- 3

RESOURCE PERSON: MRS SAKINA PATLA

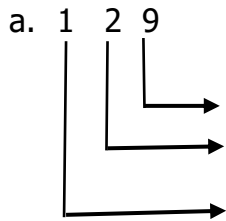
NAME: _____ CLASS: II SEC: _____ DATE: _____

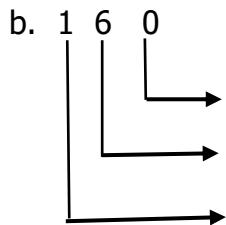
Q1. Write the place and place value of the given number.

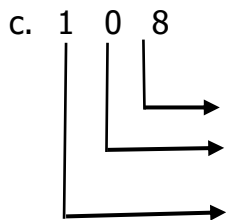
Number

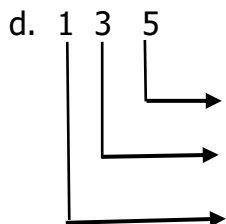
Place

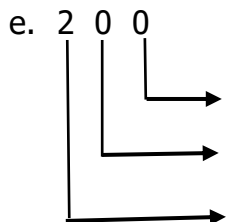
Place value













INDIAN SCHOOL AL WADI AL KABIR
DEPARTMENT OF MATHEMATICS (2021 – 2022)

TOPIC: NUMBER CONCEPTS

WORKSHEET NO - 4

RESOURCE PERSON: Mrs. Sakina Patla

NAME: _____ CLASS: II SEC: ___ DATE: _____

Q1. Circle the greatest number in the given set.

- a) 110 111 113 119
b) 160 166 106 116
c) 176 167 171 127

Q2. Underline the smallest number in the given set.

- a) 115 151 111 121
b) 119 129 149 139
c) 149 177 140 158

Q3. Colour the greatest number blue and cross out the smallest number with red in the given set.

- a) 197 132 190 139
b) 110 125 120 119
c) 177 152 189 129
d) 181 118 180 188
e) 99 109 119 199